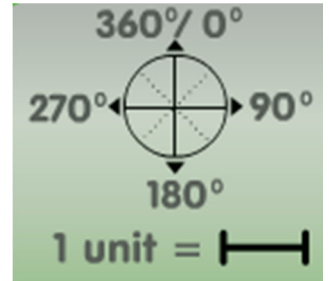



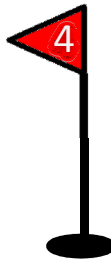
# SuperMath Golf Course

For all five balls below, work out the angle and number of distance units that will get the ball to the hole with the correct flag number.



Angle: \_\_\_\_\_

Distance: \_\_\_\_\_



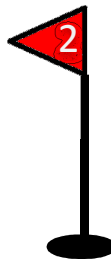
Angle: \_\_\_\_\_

Distance: \_\_\_\_\_




Angle: \_\_\_\_\_

Distance: \_\_\_\_\_



Angle: \_\_\_\_\_

Distance: \_\_\_\_\_



Angle: \_\_\_\_\_

Distance: \_\_\_\_\_

