

Mission Magnetite

Complete each of the following codes (the first one has been done for you)

Fraction

Percentage

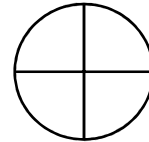
Shape

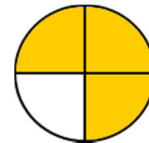
$\frac{2}{5}$

40%

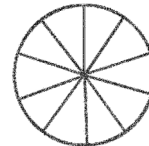


$\frac{1}{4}$





70%





100%

